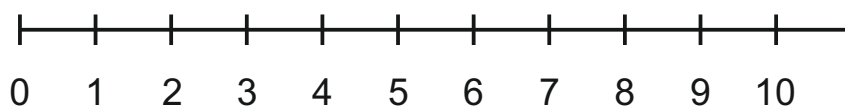
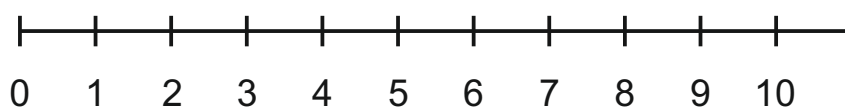


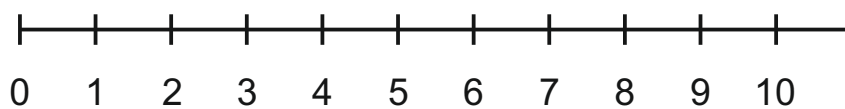
Esegui le addizioni sulla linea dei numeri



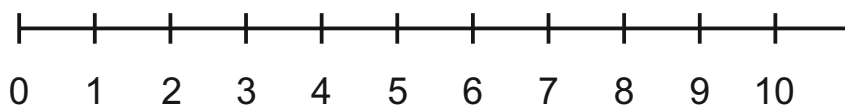
$$\underline{\quad} + \underline{\quad} = \underline{\quad}$$



$$\underline{\quad} + \underline{\quad} = \underline{\quad}$$



$$\square + \square = \square$$



$$\underline{\quad} + \underline{\quad} = \underline{\quad}$$